

St. Gregorios School

Session: 2020-21

Class-1

Sub: E.V.S

Weekly Summary – 3 (27/7/20 – 31/7/20)

CHAPTER 6 : GOOD HABITS AND CLEANLINESS

1. Summary of good habits:

A. **Ques.**What is a habit?

Ans. It is something a person does often without thinking about it.

B. **Ques.**What are the five golden words?

Ans.The five golden words are:

1. Sorry
2. Excuse me
3. Please
4. Thank you
5. Welcome

FEW GOOD HABITS

1. We should talk to every one politely .
2. We must greet those whom. we meet with a smile.

3. We should be kind to animals.
4. We must always be on time.

GOOD EATING HABITS

1. Wash your hands before eating.
2. Wash your hands and mouth after eating .
3. Do not waste your food.
4. Do not talk while eating .

TOILET HABITS

1. Wash your hands with soap and water after using the toilet .
2. Flush the toilet with water after every use .

REVISION OF CHAPTER-5 FOOD WE EAT.

Put (✓) or (✗)

1. We eat lunch at night _____.
2. The food we eat in the morning is called breakfast _____
3. We must drink two glasses of water everyday _____
4. Red gram and green gram are pulses _____
5. We must eat pizza everyday _____
6. Fruit juices are good for health _____
7. We get pulses from animals _____
8. Rice and wheat are cereals _____

CIRCLE THE ODD ONE OUT

1. mango ; apple ; peas ; banana .
2. milk ; almonds ; walnut ; coconut .
- 3.egg ; watermelon ; milk ; meat .
- 4.green gram ; black gram ; turnip ; red gram.
- 5.rice ; wheat ; potato ; maize .
- 6.radish ; groundnut ; carrot ; beetroot .

NAME THE FOLLOWING

1. Two sources of food -----
- 2.Two food items you eat during lunch.-----
- 3.Two food items you eat during dinner. -----
- 4.Two food items you take during breakfast.-----

NOTE

1. Do all the textual exercises given on page 187 and 188.
2. Paste pictures related to the chapter food.
3. Draw , name and colour the following-
 - A. Any two fruits.
 - B. Any two vegetables.
 - C. Any two food items we get from animals.

St Gregorios School, Dwarka
Session: 2020-2021
Class 1
Subject- Mathematics
Weekly Summary – 3 (Dated 27/07/2020 – 31/07/2020)

ADDITION

- . Addition means putting together
- . The sign of addition is ‘ + ’ .
- . After adding two numbers,
we put the sign of equal to ‘ = ’ .

$$\begin{array}{r} 000 \\ 3 \end{array} + \begin{array}{r} 00 \\ 2 \end{array} = \begin{array}{r} 00000 \\ 5 \end{array}$$

- . The answer we get is called the sum .

Q-1 Add the following by counting the objects .

eg $\begin{array}{c} \square \square \square \square \\ 4 \end{array} + \begin{array}{c} \square \square \square \\ 3 \end{array} = \begin{array}{c} \square \square \square \square \square \square \square \\ 7 \end{array}$




1) $\begin{array}{c} \text{😊😊😊😊😊} \\ 5 \end{array} + \begin{array}{c} \text{😊😊😊😊} \\ 4 \end{array} = \begin{array}{c} \text{😊😊😊😊😊😊😊😊😊😊} \\ 9 \end{array}$

_____ + _____ = _____

$\begin{array}{c} \triangle \triangle \triangle \triangle \\ \triangle \triangle \triangle \end{array} + \begin{array}{c} \triangle \triangle \\ \triangle \triangle \end{array} = \begin{array}{c} \triangle \triangle \triangle \triangle \triangle \\ \triangle \triangle \triangle \triangle \end{array}$

2) $\begin{array}{c} \triangle \triangle \triangle \\ \triangle \triangle \triangle \end{array} + \begin{array}{c} \triangle \triangle \triangle \\ \triangle \triangle \triangle \end{array} = \begin{array}{c} \triangle \triangle \triangle \triangle \triangle \\ \triangle \triangle \triangle \triangle \end{array}$

_____ + _____ = _____

3)   

_____ + _____ = _____

Q-2 Horizontal Addition (using fingers) .

eg $5 + 3 = 8$ \rightarrow keep 5 in mind , open 3 fingers then start counting after 5 on fingers to get 8 .

1) $3 + 5 = \text{-----}$

2) $4 + 4 = \text{-----}$

3) $7 + 1 = \text{-----}$

4) $6 + 3 = \text{-----}$

Q-3 **ROLE OF ZERO**

Zero added to any number gives the same number

 +  = 

0 + 4 = 4

0 + 1 = -----

0 + 6 = -----

7 + 0 = -----

9 + 0 = -----

Q-4 VERTICAL ADDITION (USING FINGERS)

$$\begin{array}{r} \text{Eg} \quad 2 \\ + 4 \\ \hline 6 \\ \hline \end{array}$$

Keep 2 in mind ,
open 4 fingers then start counting after 2 on fingers to get 6 .

$$\begin{array}{r} 1) \quad 4 \\ + 3 \\ \hline \\ \hline \end{array}$$

$$\begin{array}{r} 2) \quad 6 \\ + 2 \\ \hline \\ \hline \end{array}$$

$$\begin{array}{r} 3) \quad 1 \\ + 5 \\ \hline \\ \hline \end{array}$$

$$\begin{array}{r} 4) \quad 5 \\ + 1 \\ \hline \\ \hline \end{array}$$

Q-5 Order of Addition

While doing addition , if the order of the numbers is changed , the answer does not change.

eg $3 + 2 = 5$
 $2 + 3 = 5$

OR $3 + 2 = 2 + 3 = 5$

1) $8 + 1 = \text{-----} + 8$

2) $2 + \text{-----} = 0 + 2$

3) $\text{-----} + 7 = 7 + 1$

4) $5 + \text{-----} = 5$

Note :- Do exercise 7.1 , 7.3 , 7.4 in textbook .

अभ्यास पत्रिका - [2020-21]

कक्षा - I


विषय - हिन्दी


उ (७) व ऊ (८) तथा ऋ (८) की मात्रा

प्रश्न 1 - उ (७) व ऊ (८) की मात्रा के 5-5 शब्द लिखो :-


1.	_____	_____
2.	_____	_____
3.	_____	_____
4.	_____	_____
5.	_____	_____

प्रश्न 2 . चित्र पहचानकर वाक्य पूरे करो :-

1.  _____ खिल गया ।

2. अमर  _____ पहन ।

3. बालक  — पी।

4.  — डूब गया।

प्रश्न 3- निम्न वर्णों पर (त्रिद्व) की मात्रा लगाओ :-

क ग घ म व त स
प ह ध फ य ढ

प्रश्न 4- उचित स्थान पर () की मात्रा लगाओ

(i) नप (iv) वक्षा (vii) कषक (x) घत
(ii) मग (v) तण (viii) पथ्वी
(iii) मात (vi) कषि (ix) सप

प्रश्न 5- चित्र बनाकर रंग भरौ -

(i) वृक्षा -


(ii) गृह -





31.7.2020


WORKSHEET
CLASS - I
ENGLISH

I Use This/That in the following sentences.


1. _____ is a football. → 


2. _____ is a bowl. 


3. _____ is a skate board. 

4. _____ is a hot air balloon. → 

5. _____ is a stick. |

6. _____ is a colourful kite. → 


7. _____ is a colour box. → 

8. _____ is a hut. → 

Fill in the blanks with the help of given clues.

shady, mangoes, big, tree

King, summer,



1. This is a mango _____.
2. It is very _____ and _____.
3. There are lots of _____ on the tree.
4. Mango is the _____ of fruits.
5. Mangoes come in _____ season.
6. I like mangoes very much.